


Divide 2-digits by 1-digit (1)

1 There are 84 pencils to be shared equally into 4 pots.



a) Draw the pencils on the place value chart to show how they are shared.

Tens	Ones
10 10	1
10 10	1
10 10	1
10 10	1

b) Complete the number sentences.

8 tens \div 4 = 2 tens

4 ones \div 4 = 1 one

84 \div 4 = 21

c) How many pencils are in each pot?

21

2 Use a place value chart to work out the calculations.

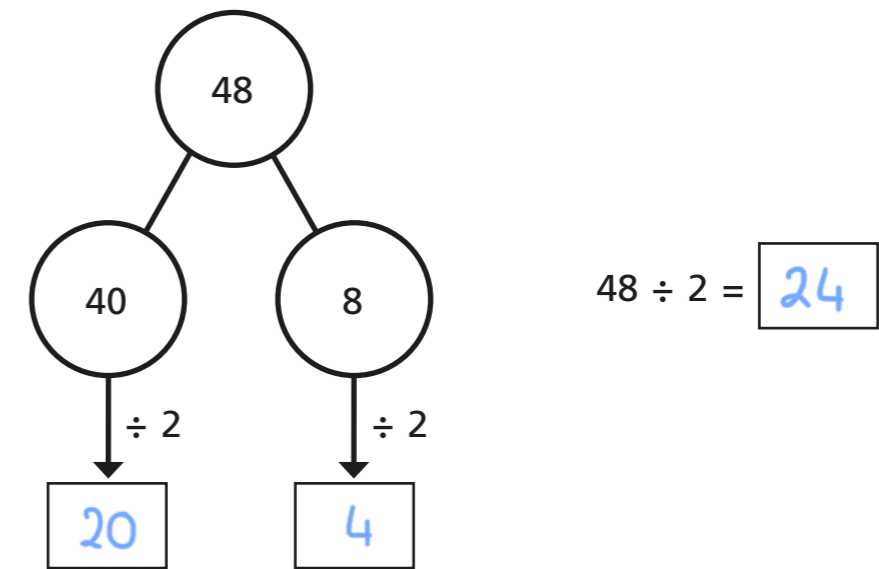
a) 39 \div 3 = 13

b) 68 \div 2 = 34

3 Amir solves $48 \div 2$ on a place value chart.

Tens	Ones
10 10	1 1 1 1
10 10	1 1 1 1

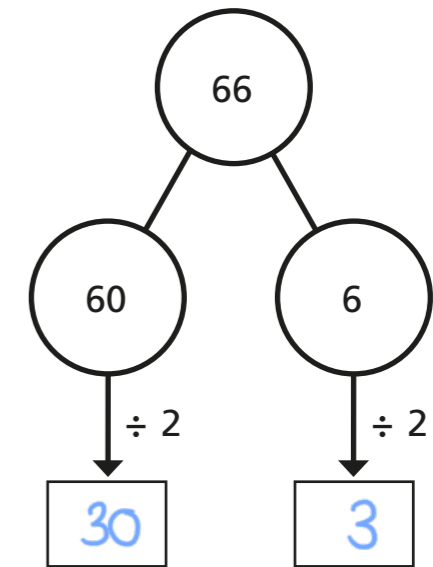
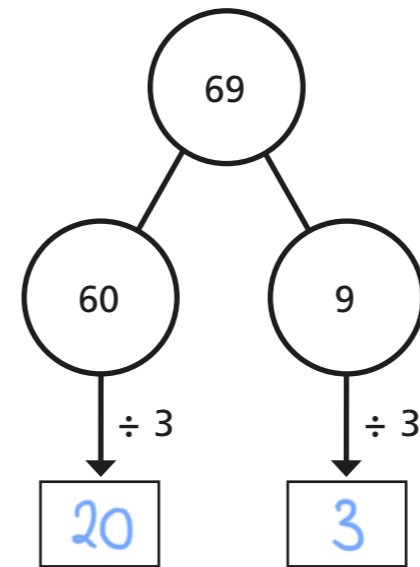
Complete the part-whole model to show what Amir has done.



4 Work out the divisions.

a) $69 \div 3 = 23$

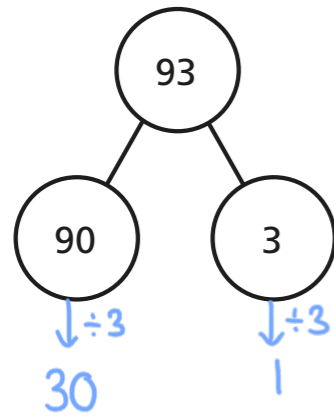
b) $66 \div 2 = 33$





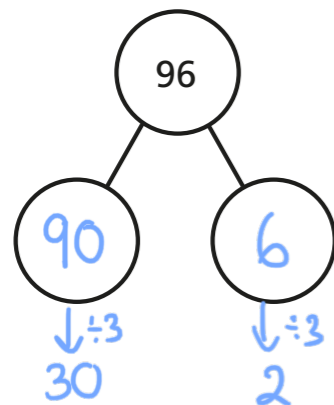
5 Work out the divisions.

a) $93 \div 3 = \boxed{31}$



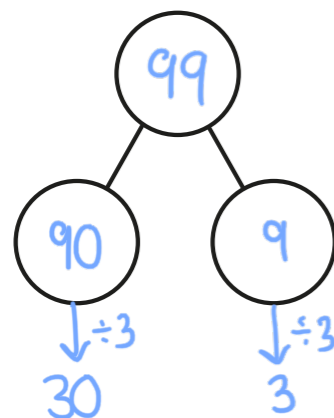
b) $82 \div 2 = \boxed{41}$

$96 \div 3 = \boxed{32}$



$84 \div 2 = \boxed{42}$

$99 \div 3 = \boxed{33}$




$86 \div 2 = \boxed{43}$

What do you notice?



6



88 can be divided equally by 2 and by 4

Do you agree with Annie? Yes

Explain why.

$88 \div 2 = 44$

$88 \div 4 = 22$


Can Annie divide 88 equally by any other 1-digit numbers?

7

Esther has 2 jars of mints.

Esther shares the mints equally between 3 bowls.

How many mints are in each bowl?



There are $\boxed{32}$ mints in each bowl.

How many different ways can you work out the answer?

